

February 22nd

Maths - Telling Time to the Hour

Have a look at the picture below. What do you already know about clocks?



Tell an adult everything you know about clocks. *Prompt them with ideas about minute/hour hands, hours, seconds, minutes, morning, afternoon, evening, o'clock and so on.*

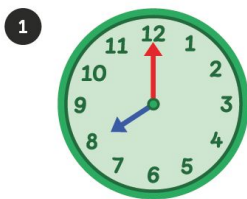
Look at the **In Focus** task below. What time does the clock show?

In Focus

Look at the clock.
What time does it show?



My friend said it is 12 o'clock. Is my friend correct? How do we know?



→ This is the minute hand.

→ This is the hour hand.

The minute hand is pointing to 12.
The hour hand is pointing to 8.
The time is 8 o'clock.













Can you tell if it is morning, afternoon, evening or night from the clock?



Is it 8 o'clock in the morning or the evening? Look at the picture of Hannah leaving her house for clues.

Now let's look at question 2. What is the same about each hour? What is different?

2 What time does each clock show?

			
12 o'clock	<input type="text"/>	2 o'clock	3 o'clock
			
4 o'clock	5 o'clock	<input type="text"/>	7 o'clock
			
8 o'clock	9 o'clock	10 o'clock	<input type="text"/>

Now have a go at the Guided Practice below. Remember to look for clues in the pictures. How can we be sure it is in the morning, afternoon or evening?

Guided Practice

What is the time?




It is 8 o'clock in the morning.



It is in the morning.





It is in the afternoon.



It is in the evening.


It's now time for you to have a go! Please do pages 101 -104 in your Workbook. If you would like a bit of a challenge have a go at the maths challenge too (Just discuss your ideas, no need to write anything down).

Spot the difference



Which shows
3 o'clock?

Explain the mistake



The time is
1 o'clock